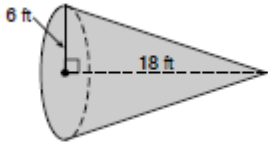
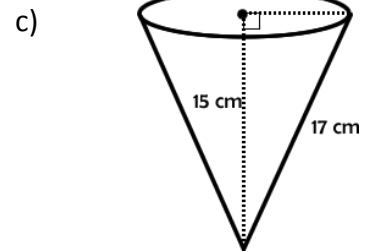
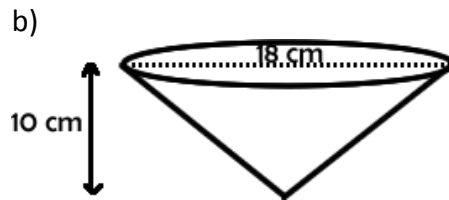
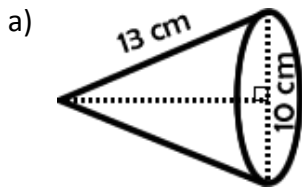


1. Find the slant height to the nearest tenth of a foot:



2. Determine the volume of the cone in terms of π .



3. Determine the volume of the cone to the nearest hundredth.

