

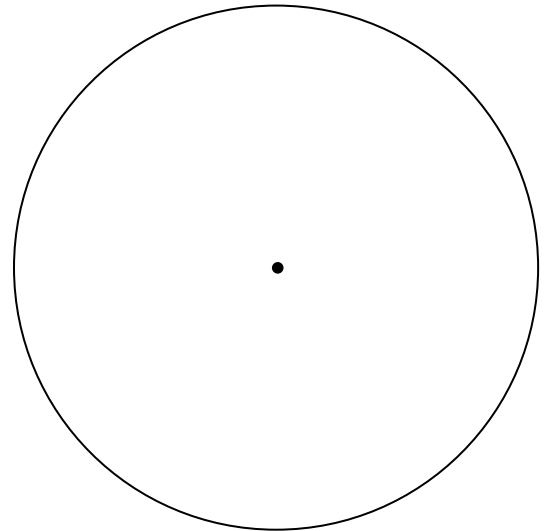
Name _____ Date: _____ Section: _____

CONSTRUCTION OF A SQUARE INSCRIBED IN A CIRCLE

Key Idea: Diagonals of a square are _____ of each other.

Steps:

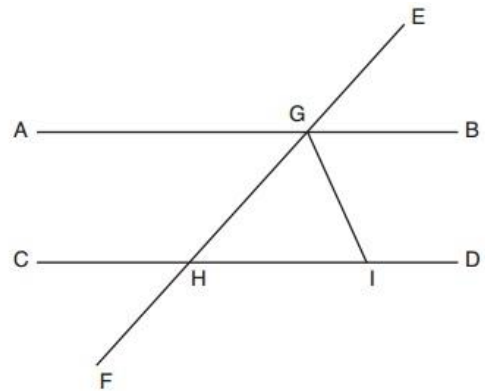
- 1) Draw a _____.
- 2) _____ the diameter.
- 3) Connect the four points on the circle to make the _____ of the square.



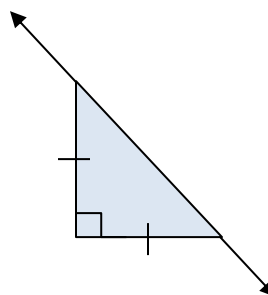
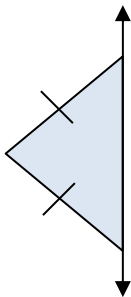
REVIEW PACKET

For each question make sure to write all formulas, substitutions, and show all work. Clearly label your work and clearly identify your answers.

1. If \overline{IG} is translated such that I maps to H, which type of quadrilateral will be formed? _____
 - a. Explain your reasoning:
 - b. What will be the slope of $\overline{HG'}$? _____



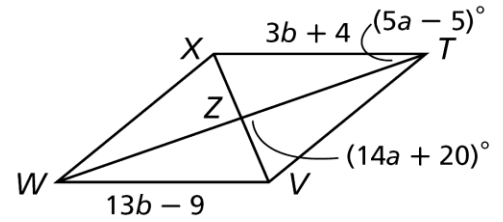
2. Name the type of quadrilateral that will be formed by reflecting the following triangles into the line:
 - a. _____
 - b. _____



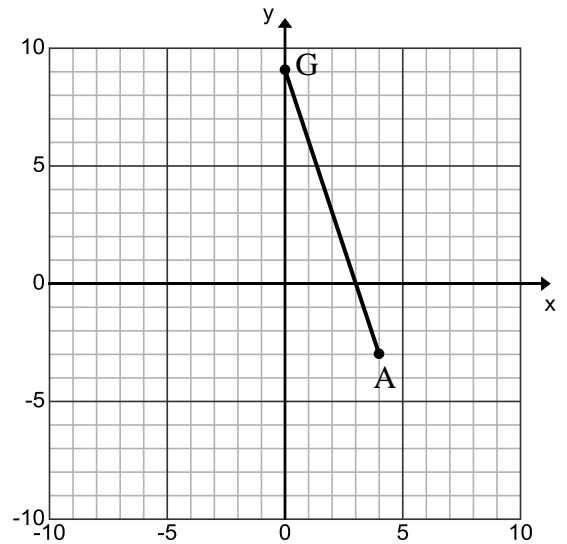
Unit 6 Review Geometry 2016-17

3. $TVWX$ is a rhombus. Find the following:

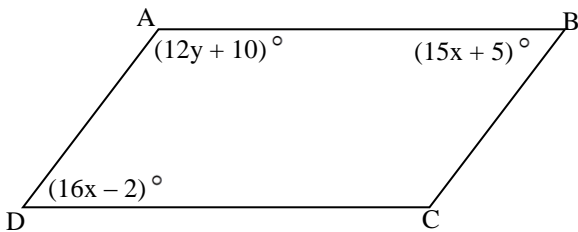
- TV
- $m\angle VTZ$
- $m\angle XWV$
- $m\angle ZVW$



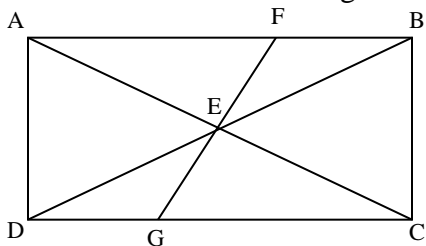
4. Write the equation of the line that contains the diagonal \overline{RY} of rhombus GRAY with $G(0,9)$ and $A(4,-3)$:



5. Given $\square ABCD$, determine the value of y .



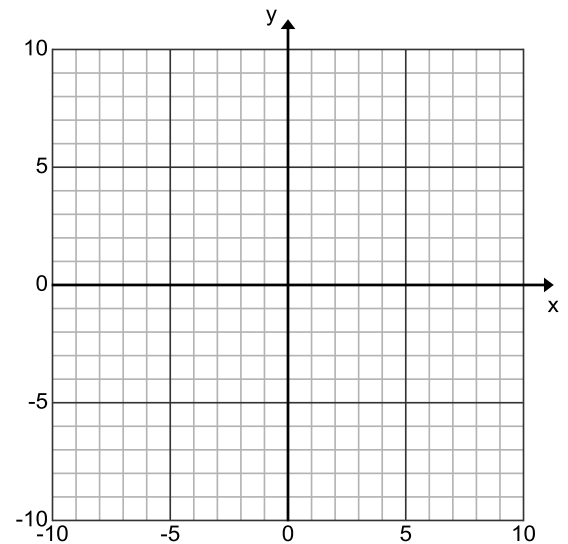
6. Given $ABCD$ is a rectangle with $m\angle DAC = 67^\circ$ and $m\angle FEB = 34^\circ$, find $m\angle AFE$.



Unit 6 Review Geometry 2016-17

7. Rhombus PNWL, $NW = 12$, and $m\angle WLP = 144^\circ$. Find PN , $m\angle LWP$ and $m\angle PNW$. Draw and label a diagram to help justify your answer.

8. A quadrilateral has vertices with coordinates B(-3,1), S(0,3), P(5,2), and A(-1,-2). Classify the quadrilateral using coordinate geometry and explain your reasoning.



What would you calculate to prove BSPA is *not* an isosceles trapezoid? Give two options:

1. _____ 2. _____

9. In rectangle ABCD with the diagonals intersecting at E, find the length of AE when $AC = 8x-3$ and $BD = 4x+17$. Be sure to draw a diagram first!

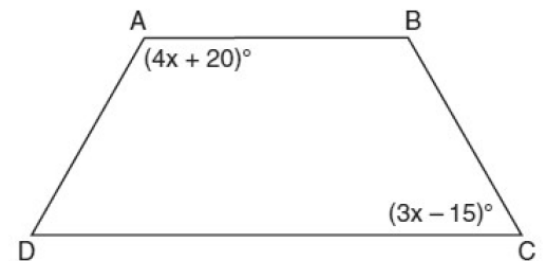
Unit 6 Review Geometry 2016-17

10. The diagonals of a rhombus measure 8 inches and 16 inches, respectively. What is the perimeter of the rhombus? Write your answer in simplest radical form.
(Draw and label a diagram to justify your answer.)

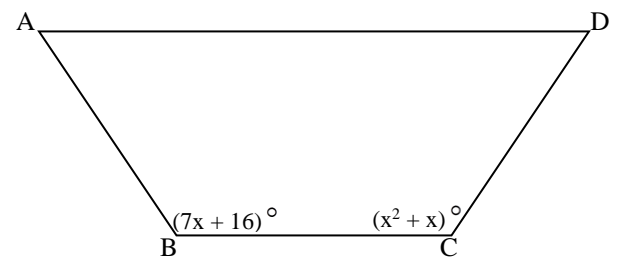
11. In parallelogram ABCD, the diagonals \overline{AC} and \overline{DB} intersect at E. Draw a picture and determine which statement must be true:

1. $\overline{AC} \cong \overline{DB}$
2. $\angle ABD \cong \angle CBD$
3. $\triangle AED \cong \triangle CEB$
4. $\triangle DCE \cong \triangle BCE$

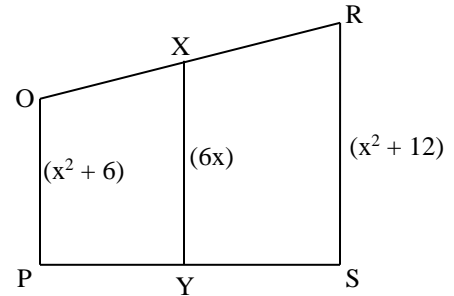
12. In the diagram of trapezoid ABCD, $\overline{AB} \parallel \overline{DC}$, $\overline{AD} \cong \overline{BC}$.
If $m\angle A = (4x + 20)^\circ$ and $m\angle C = (3x - 15)^\circ$, find $m\angle D$.



13. Find the value(s) of x so that ABCD is an isosceles trapezoid with bases \overline{AD} and \overline{BC} .



14. \overline{XY} is the midsegment of the trapezoid. Find the value of x .



15. Quadrilateral ABCD has diagonals \overline{AC} and \overline{DB} . What information is *not* sufficient to prove ABCD is a parallelogram?

- A. \overline{AC} and \overline{DB} bisect each other
- B. $\overline{AB} \cong \overline{CD}$ and $\overline{BC} \cong \overline{AD}$
- C. $\overline{AB} \cong \overline{CD}$ and $\overline{AB} \parallel \overline{CD}$
- D. $\overline{AB} \cong \overline{CD}$ and $\overline{BC} \parallel \overline{AD}$

16. In quadrilateral ABCD, the diagonals bisect its angles. If the diagonals are *not* congruent, quadrilateral ABCD must be a

- A. Square
- B. Rectangle
- C. Rhombus
- D. Trapezoid

17. Quadrilateral $MNOP$ is a trapezoid with $\overline{MN} \parallel \overline{OP}$. If $MN'O'P'$ is the image of $MNOP$ after a reflection over the x -axis, which two sides of quadrilateral $MN'O'P'$ are parallel?

- 1. $\overline{M'N'}$ and $\overline{O'P'}$
- 2. $\overline{M'N'}$ and $\overline{N'O'}$
- 3. $\overline{P'M'}$ and $\overline{O'P'}$
- 4. $\overline{P'M'}$ and $\overline{N'O'}$

18. When a quadrilateral is reflected over the line $y=x$, which geometric relationship is *not* preserved?

- A. Congruence
- B. Orientation
- C. Parallelism
- D. Perpendicularity

19. If the diagonals of a quadrilateral are congruent but do not bisect each other, the quadrilateral may be a(n):

- A. Rectangle
- B. Isosceles Trapezoid
- C. Rhombus
- D. Square

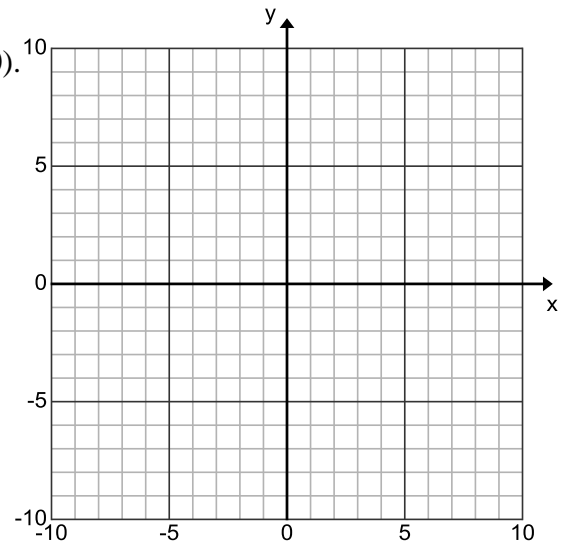
20. In quadrilateral ABCD, each diagonal bisects opposite angles. If the $m\angle DAB = 70^\circ$, then ABCD must be a

- A. Rectangle
- B. Trapezoid
- C. Rhombus
- D. Square

Unit 6 Review Geometry 2016-17

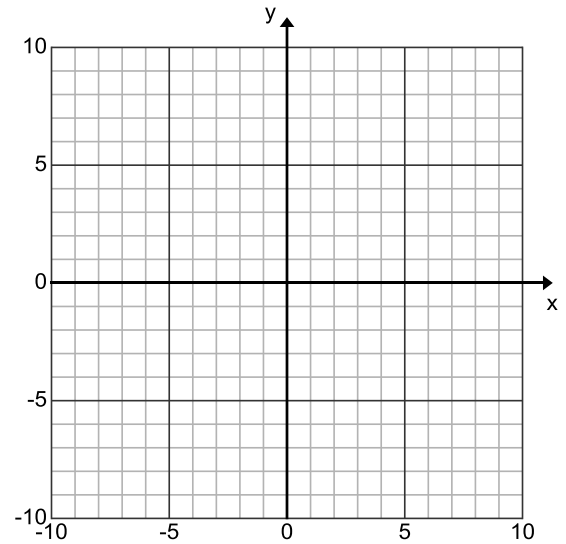
21. In rhombus ABCD, diagonals \overline{AC} and \overline{DB} intersect at E. What kind of angle is $\angle DAE$?
- A. Acute
 - B. Straight
 - C. Right
 - D. Obtuse

22. Three vertices of parallelogram DFGH are D(-9,4), F(-1,5) and G(2,0).
- A. Write the equation of the line that contains the side of the parallelogram through vertex H.



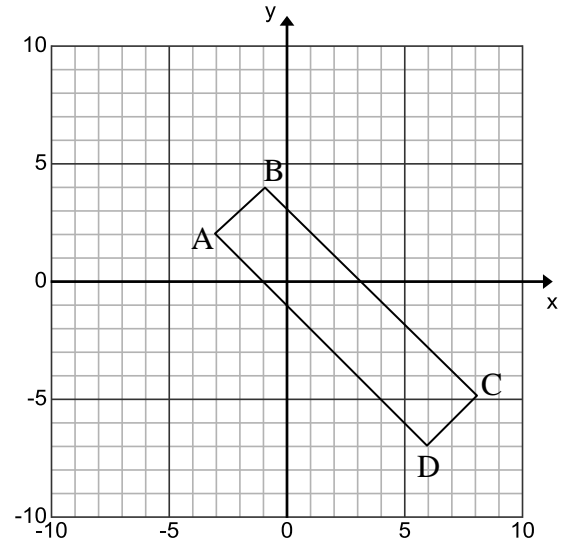
- B. State the coordinates of vertex H.

23. State the coordinates of vertices H and P of square HAPY given A(0,5) and Y(-10,-1).

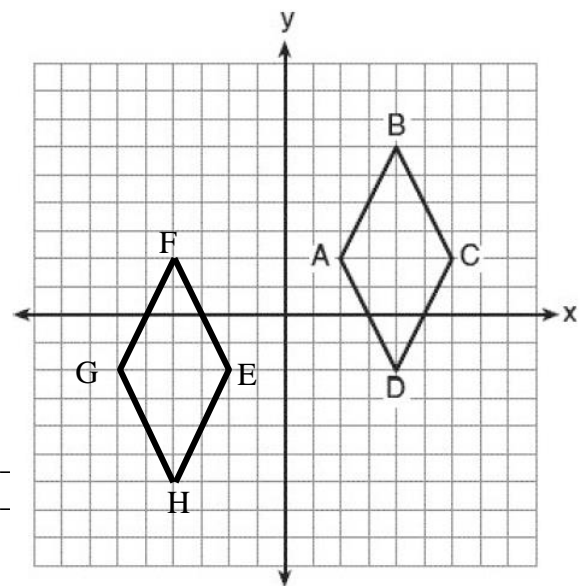


Unit 6 Review Geometry 2016-17

24. Prove quadrilateral ABCD with vertices A(-3,2), B(-1,4), C(8,-5), and D(6,-7) is a rectangle. Make sure to show all of your work including formulas, substitutions, etc. Clearly label your work.



25. Given quadrilateral ABCD and its image EFGH
 A. Describe a sequence of rigid motions that maps ABCD onto EFGH. Be specific.



B. List the properties that are preserved under all rigid motions:

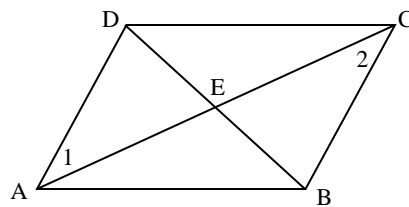
1. _____
2. _____
3. _____
4. _____

C. Fill in the blanks:

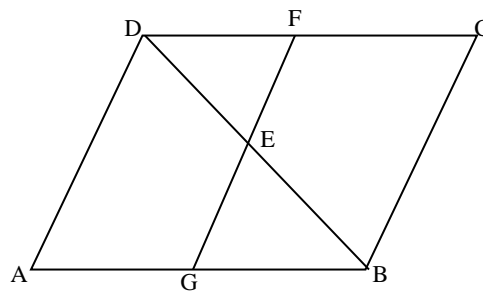
- $\sphericalangle A \cong$ _____.
- If $\overline{AB} \cong \overline{BC}$, then $\overline{EF} \cong$ _____.
- If $\overline{AB} \parallel \overline{DC}$, then $\overline{EF} \parallel$ _____.

Unit 6 Review Geometry 2016-17

26. Given: \overline{DB} bisects \overline{AC} . $\sphericalangle 1 \cong \sphericalangle 2$.
Prove: $ABCD$ is a parallelogram
Hint: first prove $\triangle ADE \cong \triangle CBE$ and use CPCTC



27. Given: $ABCD$ is a parallelogram
 \overline{FG} bisects \overline{DB}
- Prove: $\overline{FE} \cong \overline{GE}$
Hint: first prove $\triangle DEF \cong \triangle BEG$ then use CPCTC



Review Packet Unit 6 Answer Key

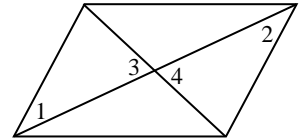
1. Parallelogram a. Translations preserve distance and slope so $\overline{IG} \cong \overline{HG}'$ & $\overline{IG} \parallel \overline{HG}'$. A quad w/1 pair of opp sides parallel & congruent is a parallelogram. (Could also use parallel and congruent translation vectors) b. the same slope as \overline{IG}		2. a. Rhombus (4 congruent sides and perpendicular diagonals). b. Square (4 congruent sides \rightarrow parallelogram and rhombus, 1 right angle \rightarrow rectangle)	
3. $TV = 7.9$ $m\angle VTZ = 20^\circ$ $m\angle XWV = 40^\circ$ $m\angle ZVW = 70^\circ$	4. $y - 3 = \frac{1}{3}(x - 2)$	6. $m\angle AFE = 57^\circ$	8. BSPA is a trapezoid since one set of opposite sides are parallel ($\overline{BS} \parallel \overline{PA}$); 1. $\overline{BP} \cong \overline{SA}$ (congruent diagonals) or 2. $\overline{SP} \cong \overline{BA}$ (congruent legs)
	5. $y = 5$	7. $PN = 12$ $m\angle LWP = 18^\circ$ $m\angle PNW = 144^\circ$	
9. $AE = 18.5$ ($x = 5$)	10. Perimeter = $16\sqrt{5}$ inches	12. $m\angle D = 60^\circ$ ($x = 25$)	14. $x = 3$
	11. 3	13. $x = 8$ or $x = -2$ (Both check)	15. D
16. C	18. B	20. C	22. A) \parallel to $\overline{DF}: y - 0 = \frac{1}{8}(x - 2)$ \parallel to $\overline{FG}: y - 4 = -\frac{5}{3}(x + 9)$ B) H(-6,-1)
17. 1	19. B	21. A	
23. H and P are located at (-8,7) and (-2,-3) (note, they are interchangeable)			
24. Answers will vary depending on method chosen to prove parallelogram and then rectangle. Examples:			
<ul style="list-style-type: none"> 1st prove parallelogram: <ul style="list-style-type: none"> Since the slopes of \overline{AB} & $\overline{CD} = -1$ and the slopes of \overline{BC} & $\overline{AD} = 1$, then $\overline{AB} \parallel \overline{CD}$ and $\overline{BC} \parallel \overline{AD}$. Since both sets of opposite sides are \parallel, then quadrilateral ABCD is a parallelogram. Since $AB = 2\sqrt{2} = CD$ and $BC = 9\sqrt{2} = AD$, then $\overline{AB} \cong \overline{CD}$ and $\overline{BC} \cong \overline{AD}$. Since both sets of opposite sides are congruent, then quadrilateral ABCD is a parallelogram. Since the midpoints of \overline{BD} & \overline{AC} are both (2.5, -1.5), then the diagonals bisect each other so quad ABCD is a \square. 2nd prove rectangle: <ul style="list-style-type: none"> Since the slopes of $\overline{AB} = 1$ & $\overline{BC} = -1$ are opposite reciprocals, then $\overline{AB} \perp \overline{BC}$. Since $\angle B$ is a right \angle, then parallelogram ABCD is a rectangle. Since $AC = \sqrt{170} = BD$, then $\overline{AC} \cong \overline{BD}$. Since the diagonals are congruent, then parallelogram ABCD is a rectangle. 			
25. A. Examples: Line reflection over the y-axis followed by a translation $\langle 0, -4 \rangle$ (down 4); Translation of $\langle -4, -4 \rangle$ followed by a reflection over the line $x = -2$		B. Angle Measure, Distance, Parallelism, Perpendicularity	C. $\angle E''$ \overline{FG} \overline{HG}

Unit 6 Review Geometry 2016-17

15. Prove ABCD is a parallelogram

1. $\angle 1 \cong \angle 2$
2. $\overline{AD} \parallel \overline{CB}$
3. \overline{DB} bisects \overline{AC}
4. $\overline{EA} \cong \overline{EC}$
5. $\angle 3 \cong \angle 4$
6. $\triangle ADE \cong \triangle CBE$
7. $\overline{AD} \cong \overline{CB}$
8. ABCD is a parallelogram

1. Given
2. \cong alt int \angle 's $\rightarrow \parallel$ lines
3. Given
4. Segment bisector \rightarrow 2 congruent segments
5. Vertical angles are congruent
6. $ASA \cong ASA \rightarrow \cong \Delta$'s (1,5,7)
7. CPCTC
8. Quadrilateral w/1 set of opposite sides \cong & $\parallel \rightarrow \square$



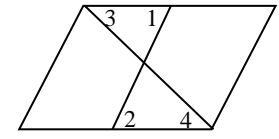
Note: could also use CPCTC to get diagonals bisect each other using $DE \cong BE$.

(steps 7&2)

16. Prove $\overline{FE} \cong \overline{GE}$

1. ABCD is a parallelogram
2. $\overline{DC} \parallel \overline{AB}$
3. $\angle 1 \cong \angle 2; \angle 3 \cong \angle 4$
4. \overline{FG} bisects \overline{DB}
5. $\overline{DE} \cong \overline{BE}$
6. $\triangle DEF \cong \triangle BEG$
7. $\overline{FE} \cong \overline{GE}$

1. Given
2. $\square \rightarrow$ opposite sides \parallel
3. \parallel lines \rightarrow alt int \angle 's \cong
4. Given
5. Segment bisector \rightarrow 2 congruent segments
6. $AAS \cong AAS$ (4, 4, 6)
7. CPCTC



Note: could instead use vertical angles and $ASA \cong$.